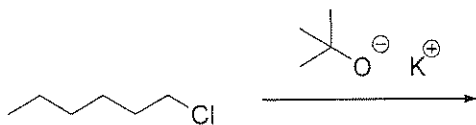

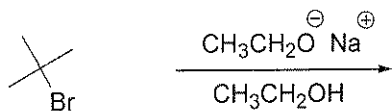


S_N1 , S_N2 , $E1$, $E2$ combined

3
mingen
chapter 9

Each of the following sets of reaction conditions may result in an S_N2 pathway, an $E2$ pathway, an S_N1 or an $E1$, or both. Assess each set of conditions to determine the most likely result. ~~If a set of conditions would result in a reaction occurring,~~ draw the product(s) + show the mechanism.



S_N1 , S_N2 , $E1$, $E2$ KEY

combined

3
Minger
chapter 9

Each of the following sets of reaction conditions may result in an S_N2 pathway, an $E2$ pathway, ~~an S_N1 or $E1$~~ , ~~or both~~. Assess each set of conditions to determine the most likely result. ~~If a set of~~ ~~conditions would result in a reaction occurring~~, draw the product(s), + show the mechanism.

