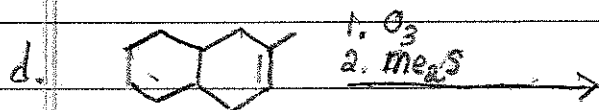





Chapter 6. Alkenes. Advanced Practice

or products

1. Give the product for each of the following reactions.



2. Give the mechanism for each of the following reactions.

