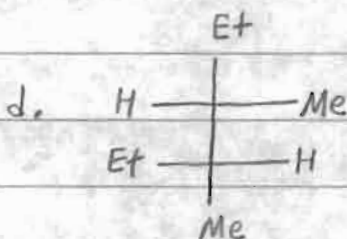
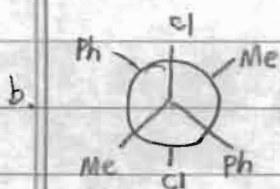
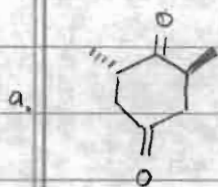


Chapter 3. Stereochem. Advanced Practice

1. Determine the R or S configuration of each chiral center below.
Is the overall molecule chiral?



2. What is the relationship between the following pairs of molecules?

